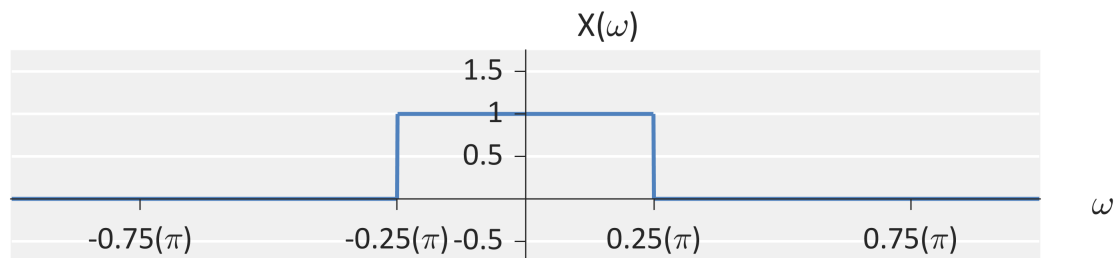
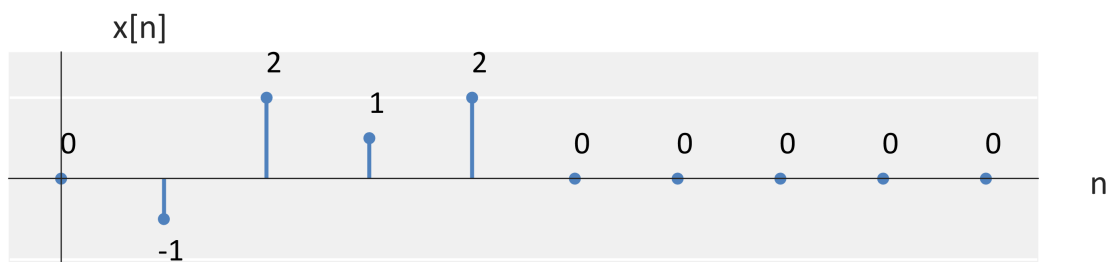


Question #1: Given the following DTFT of $x[n]$, answer the following questions.

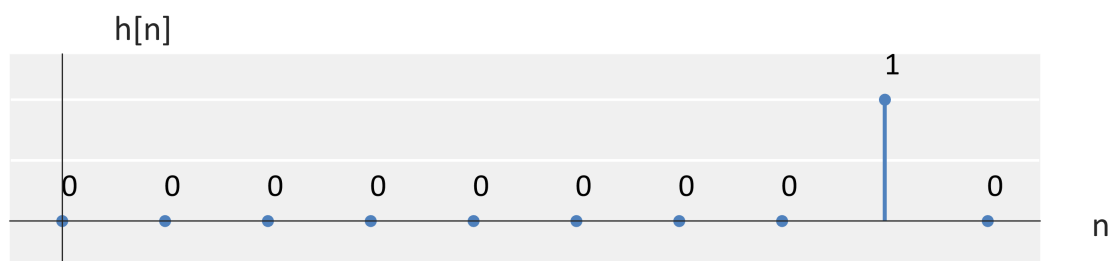


- (a) Sketch the DTFT (in the range of $-\pi$ to π) of $x[n] \cos\left(\frac{\pi}{2}n\right)$
- (b) Sketch the DTFT (in the range of $-\pi$ to π) of $x[n] \cos\left(\frac{7}{8}\pi n\right)$
- (c) Sketch the DTFT (in the range of $-\pi$ to π) of $x[n] \cos(2\pi n)$

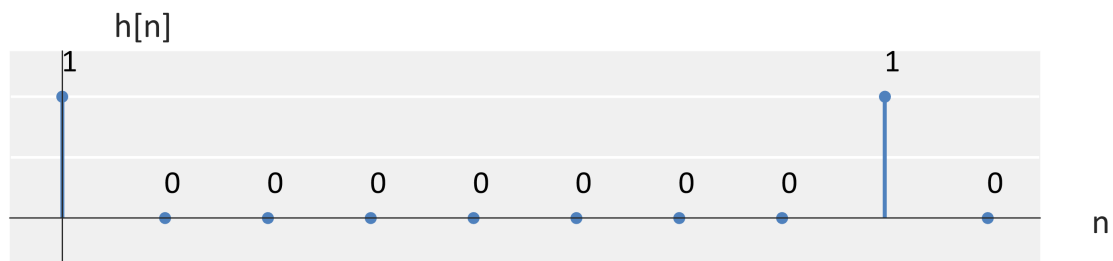
Question #2: For each part of this question, consider the following signal $x[n]$.



(a) Compute $x[n] \otimes h[n]$ for $h[n]$ below (defined for one period from $0 \leq n \leq 9$).



(b) Compute $x[n] \otimes h[n]$ for $h[n]$ below (defined for one period from $0 \leq n \leq 9$).



(c) Compute $x[n] \otimes h[n]$ for $h[n]$ below (defined for one period from $0 \leq n \leq 9$).

